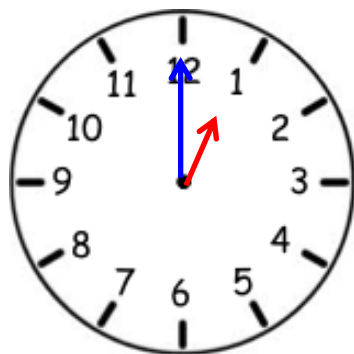
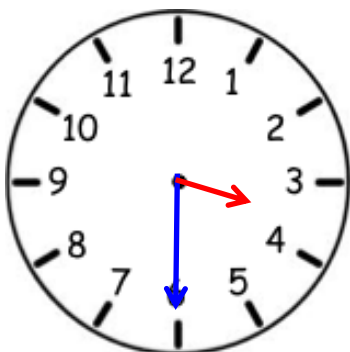


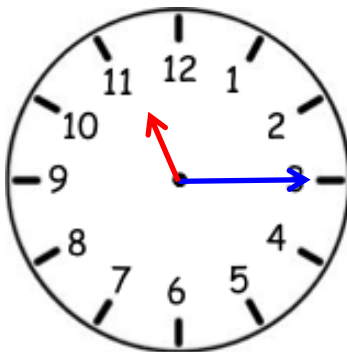
# Telling the Time worksheets



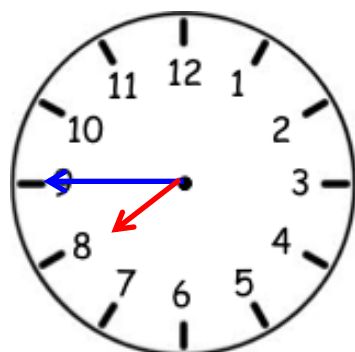
afternoon



afternoon



morning



evening

:

:

:

:

To access the 4 complete worksheets (including answers) with 12 clocks on each worksheet, at 4 levels of difficulty:

- to the quarter hours (15-minute intervals)
- to 5-minute intervals
- to 1-minute intervals
- in the 24-hour clock

visit

<http://www.saveteacherssundays.com/maths/year-3/109/telling-the-time/>

where you will also find similar worksheets for other year groups

