




Fractions of a Set worksheet


Give 2 answers for each question: in **numbers** and in **words**

Halves	Thirds	Quarters	Fifths	Sixths	Eighths	Tenths
--------	--------	----------	--------	--------	---------	--------

1a) What fraction of the shapes in set 1 are  ?

1b) What fraction of the shapes in set 1 are  ?

2a) What fraction of the shapes in set 2 are  ?

2b) What fraction of the shapes in set 2 are  ?

To access the 3 complete sets of worksheets, each with 8 pairs of questions on each, at these levels of difficulty:

- halves, thirds and quarters
- up to tenths
- describing the ratio of one shape to another

visit

<http://www.saveteacherssundays.com/maths/year-3/101/fraction-of-a-set/>



where you will also find fractions lessons plans, more fractions worksheets and other teaching resources


Name: _____

Independent / Some adult support / A lot of adult support

Date: _____


Find fractions of sets

Halves Thirds Quarters Fifths Sixths Eighths Tenths

1a) _____ or / of the shapes in set 1 are 

1b) _____ or / of the shapes in set 1 are 

2a) _____ or / of the shapes in set 2 are 

2b) _____ or / of the shapes in set 2 are 

Answers

Halves	Thirds	Quarters	Fifths	Sixths	Eighths	Tenths
--------	--------	----------	--------	--------	---------	--------

1a) Two thirds or $\frac{2}{3}$ of the shapes in set 1 are



1b) One third or $\frac{1}{3}$ of the shapes in set 1 are



2a) One quarter or $\frac{1}{4}$ of the shapes in set 2 are

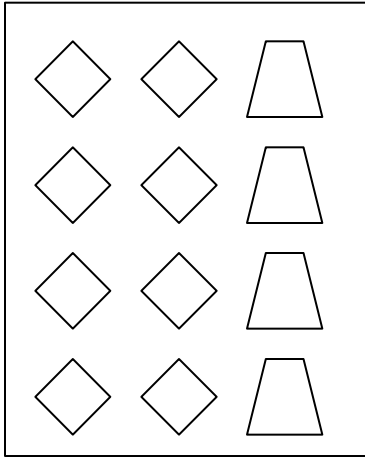


2b) Three quarters or $\frac{3}{4}$ of the shapes in set 2 are



Fractions of a Set worksheet

1)



2)

